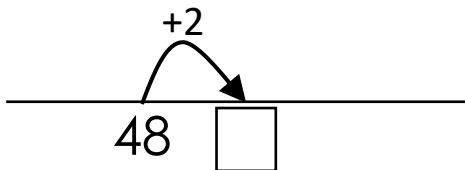
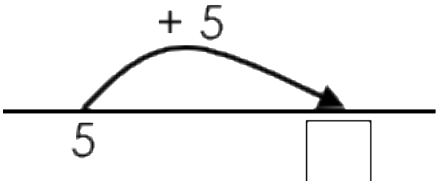
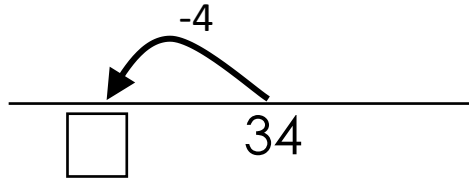


NAME	
-------------	--

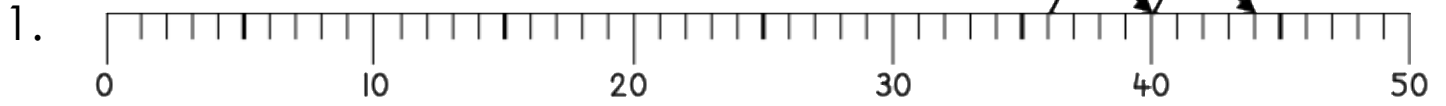
PART ONE
2 MINUTES FOR THIS PAGE

<p>1 $7 + 3 = \square$</p>	<p>9 <table border="1" style="display: inline-table; border-collapse: collapse; text-align: center;"> <tr> <td style="width: 20%; padding: 5px;">1</td> <td style="width: 80%; padding: 5px;">9</td> </tr> <tr> <td colspan="2" style="padding: 5px;"><div style="border: 1px solid black; width: 50px; height: 30px; margin: 0 auto;"></div></td> </tr> </table></p>	1	9	<div style="border: 1px solid black; width: 50px; height: 30px; margin: 0 auto;"></div>	
1	9				
<div style="border: 1px solid black; width: 50px; height: 30px; margin: 0 auto;"></div>					
<p>2 $2 + 8 = \square$</p>	<p>10 $\square + 2 = 10$</p>				
<p>3 $10 = 7 + \square$</p>	<p>11 $40 + 8 = \square$</p>				
<p>4 8 less than 10 is </p>	<p>12 $40 - 7 = \square$</p>				
<p>5 <table border="1" style="display: inline-table; border-collapse: collapse; text-align: center;"> <tr> <td style="width: 20%; padding: 5px;">2</td> <td style="width: 80%; padding: 5px;"><div style="border: 1px solid black; width: 50px; height: 25px; display: inline-block;"></div></td> </tr> <tr> <td colspan="2" style="padding: 5px;">10</td> </tr> </table></p>	2	<div style="border: 1px solid black; width: 50px; height: 25px; display: inline-block;"></div>	10		<p>13 </p>
2	<div style="border: 1px solid black; width: 50px; height: 25px; display: inline-block;"></div>				
10					
<p>6 </p>	<p>14 </p>				
<p>7 $10 - 5 = \square$</p>	<p>15 $30 - \square = 27$</p>				
<p>8 $10 - 4 = \square$</p>					

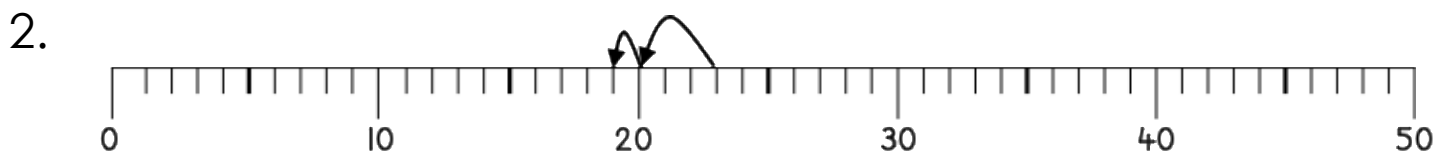
Total out of 15:	
-------------------------	--

PART TWO
1 MINUTE FOR THIS PAGE

$36 + 8 = \square$



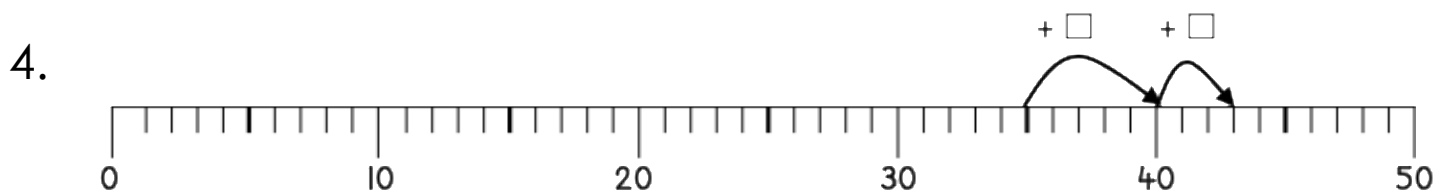
$23 - 4 = \square$



$43 - 7 = \square$



$35 + \square = 43$



5. $28 + 5 = 30 + \square$

Total out of 5: